

Name: \_\_\_\_\_

HW 7.5

Teacher: \_\_\_\_\_

Algebra Pd: \_\_\_\_\_

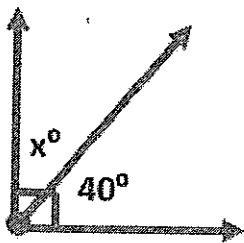
Day

Month

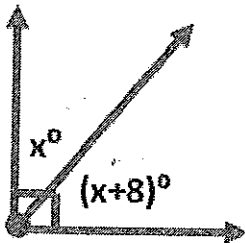
Year

Write an equation for each pair of angles given and solve for x.

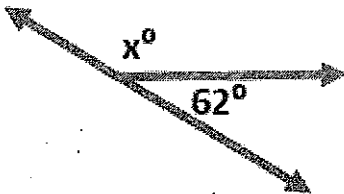
1.



2.



3.



4.

